
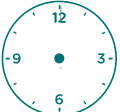

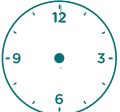

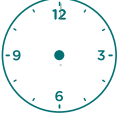

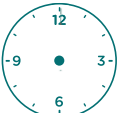






# Math Time

Be a jetsetter! Look up which timezone you live in and draw the time it would be in Japan on the blank clock. Then catch your plane - a direct flight to Japan would take about 14 hours from the East Coast, 12.5 hours from the Midwest, and 11 hours from the West Coast.

Remember, save some time for heading to the airport.



<p><b>Hawaii Time</b> 12 pm</p> 	<p><b>Japan Standard Time</b> 19 hrs ahead</p> 	<p>If you want to arrive in Japan at 10am, when should you depart?</p> <p>_____</p>
<p><b>Alaska Time</b> 10 am</p> 	<p><b>Japan Standard Time</b> 17 hrs ahead</p> 	<p>If you want to arrive in Japan at 12pm, when should you depart?</p> <p>_____</p>
<p><b>Pacific Time</b> 3:30 pm</p> 	<p><b>Japan Standard Time</b> 16 hrs ahead</p> 	<p>If you want to arrive in Japan at 8am, when should you depart?</p> <p>_____</p>
<p><b>Mountain Time</b> 9:25 am</p> 	<p><b>Japan Standard Time</b> 15 hrs ahead</p> 	<p>If you left at 7pm, what time would you arrive in Japan?</p> <p>_____</p>
<p><b>Central Time</b> 6:45 pm</p> 	<p><b>Japan Standard Time</b> 14 hrs ahead</p> 	<p>If you left at 3pm, what time would you arrive in Japan?</p> <p>_____</p>
<p><b>Eastern Time</b> 2:50 pm</p> 	<p><b>Japan Standard Time</b> 13 hrs ahead</p> 	<p>If you left at 5:30pm, what time would you arrive in Japan?</p> <p>_____</p>